


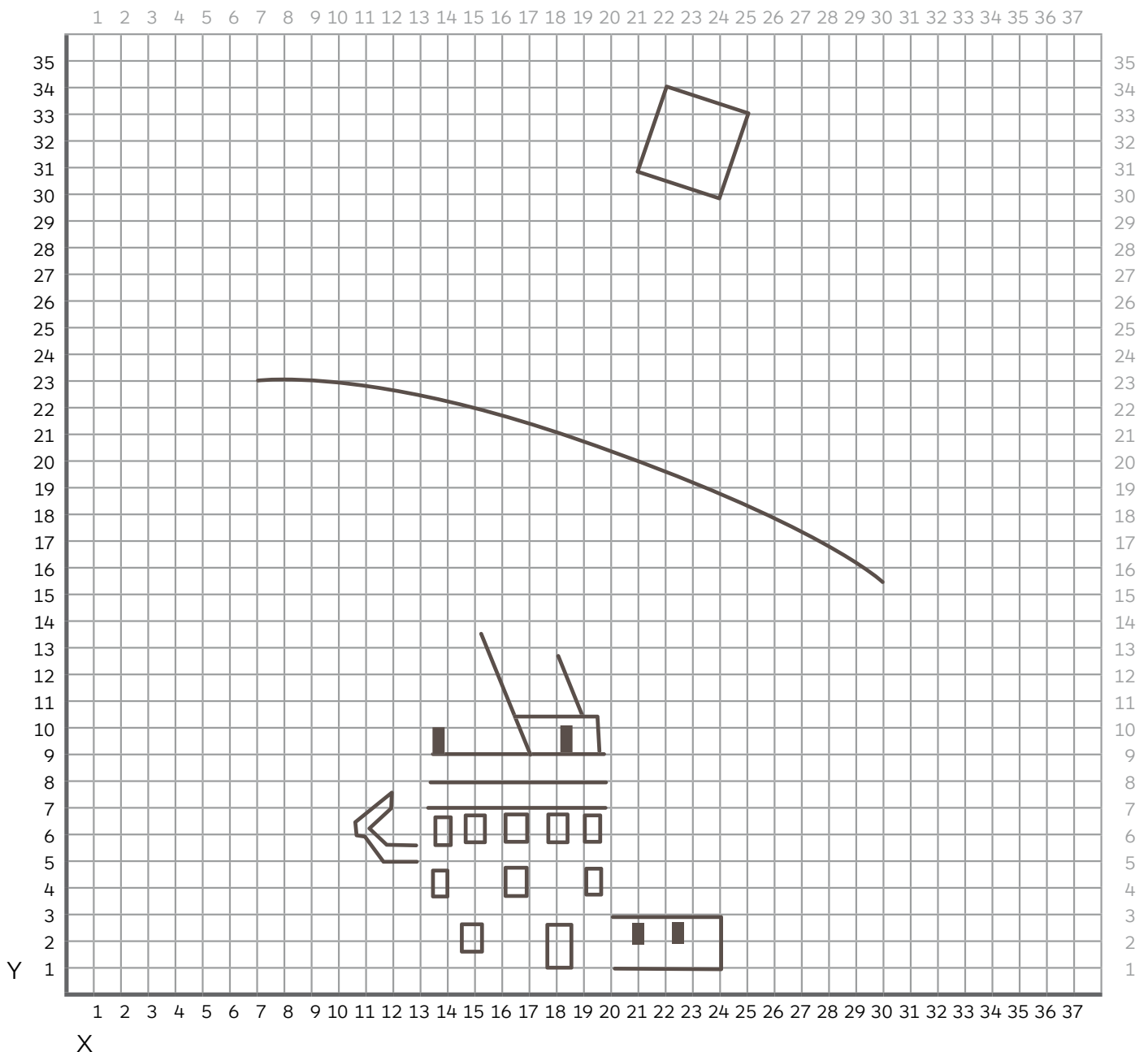
Our Solar System

Cosmic coordinate drawing




Name: _____

You will need a ruler and a pencil to complete this puzzle. On this grid, plot the coordinates listed on page 2, connect the dots as you go to see what is revealed. When the instructions say stop, lift your pencil and start a new line at the next coordinate.



Our Solar System



(x, y)	START	START	START
START	16, 16	4, 28	34, 13
21, 32	14, 11	1, 27	32, 14
9, 23	12, 11	2, 26	30, 12
7, 23	13, 10	7, 23	27, 14
22, 34	13, 9	23, 17	23, 12
25, 33	12, 9	36, 14	19, 15
27, 16	13, 8	37, 15	13, 14
26, 17	12, 8	35, 17	11, 19
24, 30	12, 7	18, 24	6, 19
21, 20	13, 7	4, 28	5, 23
20, 20	13, 1	STOP	3, 23
23, 30	20, 1	START	3, 25
STOP	20, 7	1, 27	STOP
START	21, 7	4, 24	
36, 14	21, 8	9, 20	
34, 13	20, 8	16, 16	
30, 12	21, 9	19, 15	
20, 12	20, 9	25, 14	
13, 14	20, 10	36, 14	
6, 19	21, 11	STOP	
3, 23	19, 11		
1, 27	19, 15		
STOP	STOP		

